

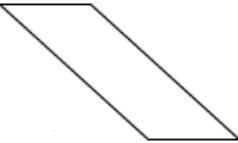
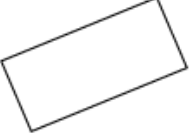



# Rectangles and Parallelograms Answer Sheet

(On the Web at <http://www.udel.edu/sine/students/rectangles/>)

Name: \_\_\_\_\_

1. For each shape pictured, report on the following.
  - a. Can you make the picture by changing the parallelogram or the rectangle?
  - b. Which type of shape did you start with?
  - c. What changes did you make to get the right image?

	<p><b>Started with</b></p> <p><input type="radio"/> <b>Parallelogram</b></p> <p><input type="radio"/> <b>Rectangle</b></p>	<p><b>I changed it by</b></p>
	<p><b>Started with</b></p> <p><input type="radio"/> <b>Parallelogram</b></p> <p><input type="radio"/> <b>Rectangle</b></p>	<p><b>I changed it by</b></p>
	<p><b>Started with</b></p> <p><input type="radio"/> <b>Parallelogram</b></p> <p><input type="radio"/> <b>Rectangle</b></p>	<p><b>I changed it by</b></p>
	<p><b>Started with</b></p> <p><input type="radio"/> <b>Parallelogram</b></p> <p><input type="radio"/> <b>Rectangle</b></p>	<p><b>I changed it by</b></p>
	<p><b>Started with</b></p> <p><input type="radio"/> <b>Parallelogram</b></p> <p><input type="radio"/> <b>Rectangle</b></p>	<p><b>I changed it by</b></p>

2. Which shape couldn't you make? Why not?